



Feb 15

Fraction Models


$$\frac{3}{6}$$




$$\frac{10}{12}$$




$$\frac{5}{8}$$



$$\frac{9}{6}$$



$$\frac{11}{8}$$



* equal size pieces

* drawn with a ruler

* parts shaded in so you can see all